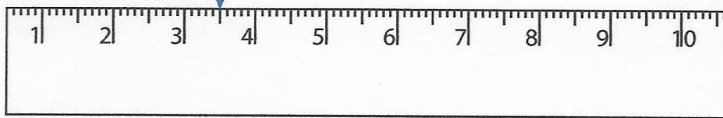


## Reading & Marking Ruler

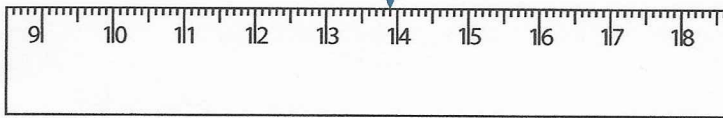
Write the reading shown by the pointer in each problem.

1)




\_\_\_\_\_ cm

2)



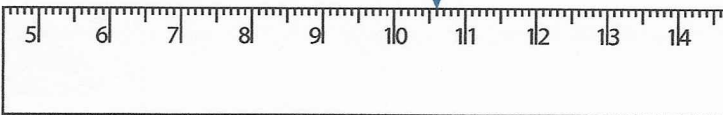
\_\_\_\_\_ cm

3)



\_\_\_\_\_ cm

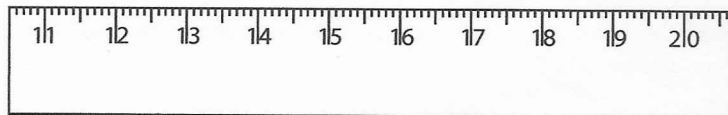
4)




\_\_\_\_\_ cm

Draw the pointer to show the reading in each problem.


5) 13.8 cm



6) 8.3 cm



7) 15.7 cm



8) 12.1 cm

